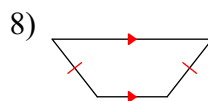
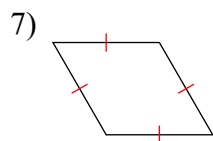
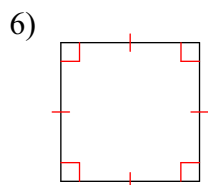
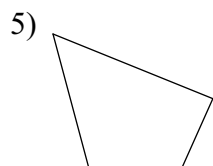
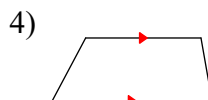
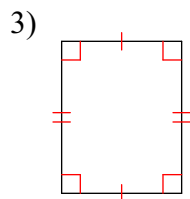
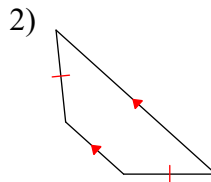
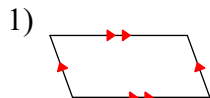
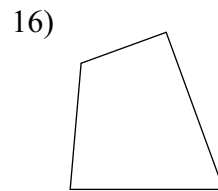
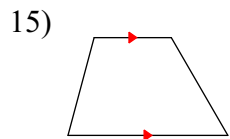
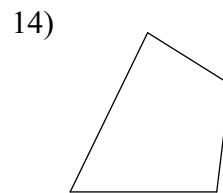
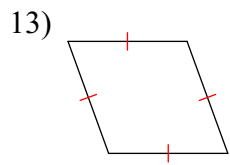
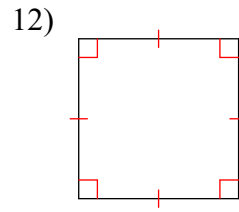
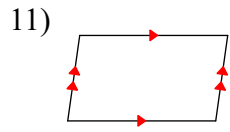
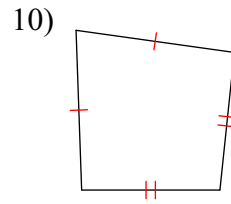
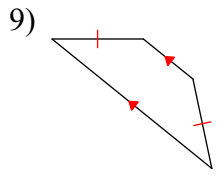


Classifying Quadrilaterals Based Diagram Markings

State the most specific name for each figure.





Answers to Classifying Quadrilaterals Based Diagram Markings (ID: 1)

- | | | | |
|------------------------|------------------------|-------------------|------------------------|
| 1) parallelogram | 2) isosceles trapezoid | 3) rectangle | 4) trapezoid |
| 5) quadrilateral | 6) square | 7) rhombus | 8) isosceles trapezoid |
| 9) isosceles trapezoid | 10) kite | 11) parallelogram | 12) square |
| 13) rhombus | 14) quadrilateral | 15) trapezoid | 16) quadrilateral |